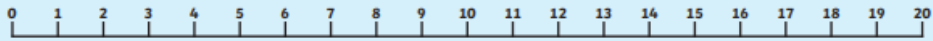
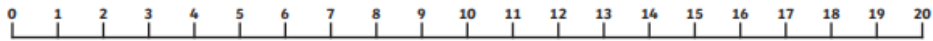


L.I: To subtract using a numberline.

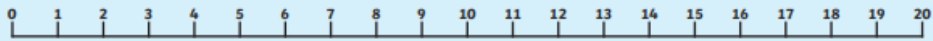
$$20 - 6 = \bigcirc$$



$$17 - 9 = \bigcirc$$



$$14 - 6 = \bigcirc$$



$$16 - 5 = \bigcirc$$



$$19 - 6 = \bigcirc$$



Digging Deeper

$$10 - \square = 9$$

$$10 - \square = 8$$

$$10 - \square = 7$$

$$10 - \square = 6$$

Now it's your turn.

*What are the next number sentences
to continue the pattern...*