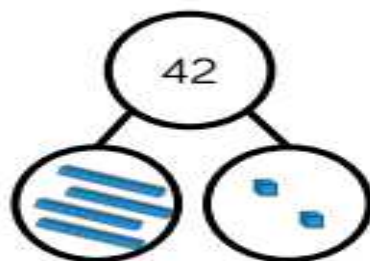
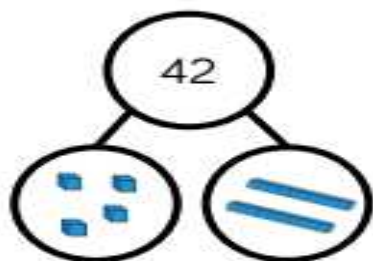


## Digging Deeper

Dora and Amir both try to build the same number.



Who is correct?

Can you explain the mistake that has been made?

Choose the correct numbers to make the sentences correct.

28    26    33    45  
36    43    35    49

is one less than 27

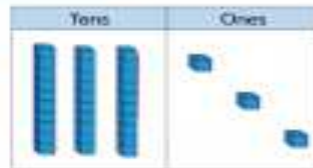
34 is one less than

is one more than 44

50 is one more than

Dexter compares two numbers.

30 is less than 33



Do you agree with Dexter?

Explain your answer.

*Has Dexter used the correct symbol?*

---