

Complete the sentences.

less than

greater than

equal to

7 tens is _____ 69

47 is _____ 48

3 tens and 6 ones is _____ thirty-six

Compare the numbers using $<$, $>$ or $=$

9 90

51 49


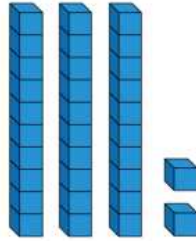
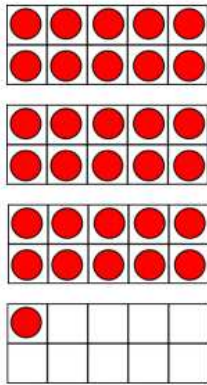
Circle the largest number.

35

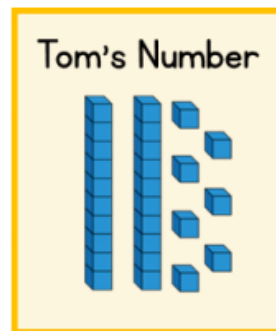
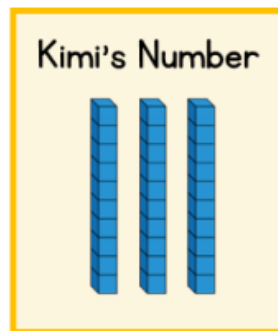
38

29

Tick the image that shows one more than 31



Kimi and Tom have each made a number.



Who has made the smallest number?

Circle your answer.

Kimi

Tom

They have made
the same number.

Explain your answer.
